

Name : _____

Score : _____

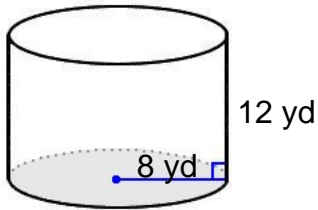
Teacher : _____

Date : _____

Volume of Prisms, Pyramids, Cylinders, and Cones

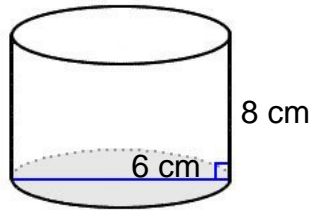
Find the volume of each figure. Round answers to the nearest hundredth, if necessary.

1)



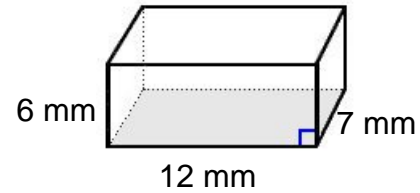
Volume: _____

2)



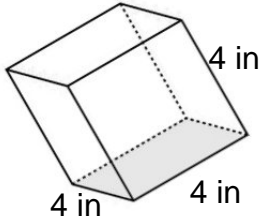
Volume: _____

3)



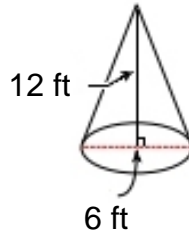
Volume: _____

4)



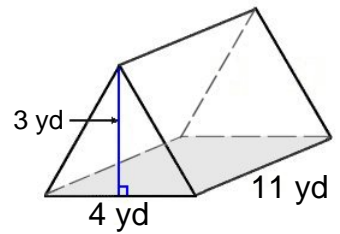
Volume: _____

5)



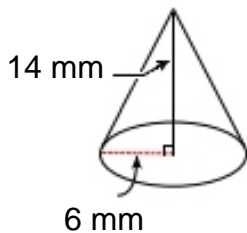
Volume: _____

6)



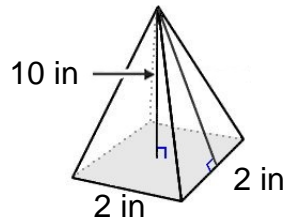
Volume: _____

7)



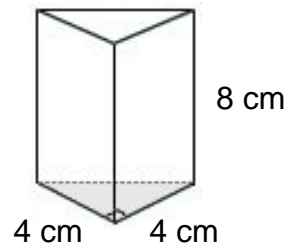
Volume: _____

8)



Volume: _____

9)



Volume: _____



Name : _____

Score : _____

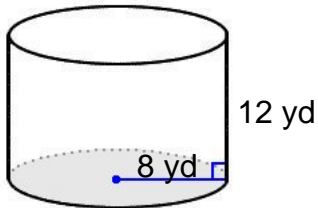
Teacher : _____

Date : _____

Volume of Prisms, Pyramids, Cylinders, and Cones

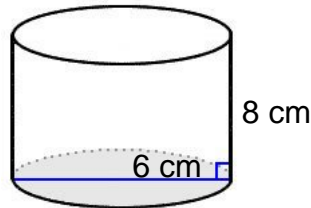
Find the volume of each figure. Round answers to the nearest hundredth, if necessary.

1)



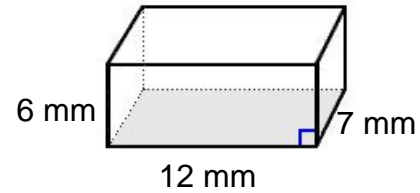
Volume: 2412.74 yd³

2)



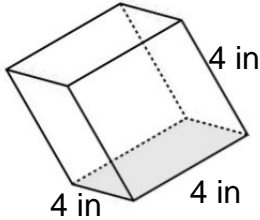
Volume: 226.19 cm³

3)



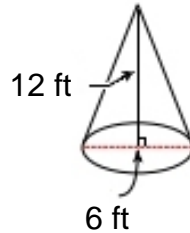
Volume: 504.00 mm³

4)



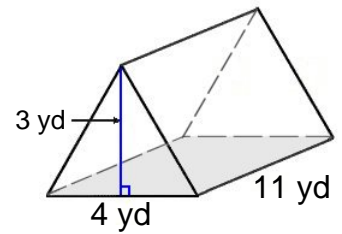
Volume: 64.00 in³

5)



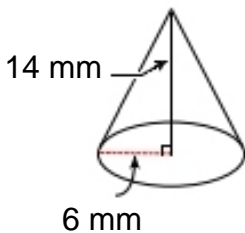
Volume: 113.10 ft³

6)



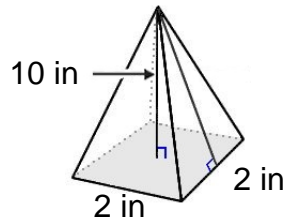
Volume: 66.00 yd³

7)



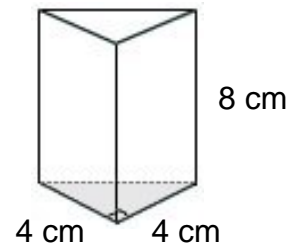
Volume: 527.79 mm³

8)



Volume: 13.33 in³

9)



Volume: 64.00 cm³

